



Matching and Sorting

Assessment PART 2


Trace on the dotted lines to sort the objects into the correct groups. Then count how many objects are in each group and check the correct answer.



Trains



Cars



Bikes



Cars

3

5

4

Bikes

5

4

3

Trains

5

4

3