

Sort and Count Fruits





Sort the fruits into the groups they belong in. Then count how many are in each group. Circle the correct answer.

Bananas

4

5

3



Watermelons

4

5

6